



NAME \_\_\_\_\_

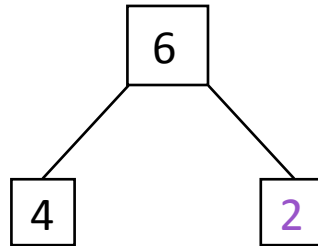

DATE \_\_\_\_\_

## MIXED OPERATIONS

Read the following questions and fill the number bond. Write an addition and subtraction number sentences that match the story.

**Example:**

Jack and Jill are playing with 6 cars. If Jack is playing with 4 of them, how many is Jill playing with?

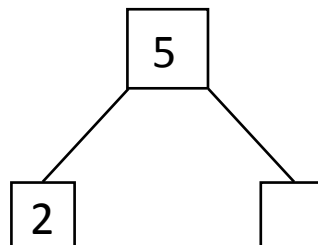



$$\boxed{4} + \boxed{2} = \boxed{6}$$

$$\boxed{6} - \boxed{4} = \boxed{2}$$

Jill is playing with 2 cars.

1) Dora has 2 bananas. Then her brother gave her some apples. Now Dora has 5 pieces of fruit. How many apples did Dora's brother gave her?

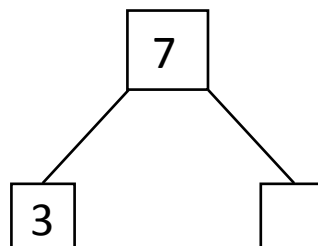
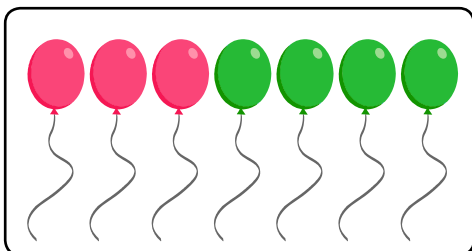


$$\boxed{2} + \boxed{\phantom{0}} = \boxed{5}$$

$$\boxed{5} - \boxed{2} = \boxed{\phantom{0}}$$

Dora's brother gave her \_\_\_ apples.

2) Andrew has 3 balloons. Then his dad gave him more balloons. Now Andrew has 7 balloons. How many balloons did Andrew's dad gave him?



$$\boxed{3} + \boxed{\phantom{0}} = \boxed{7}$$

$$\boxed{7} - \boxed{3} = \boxed{\phantom{0}}$$

Andrew's father gave him \_\_\_ balloons.